

Functional Skills Mathematics Entry 1 Sample assessment



www.cityandguilds.com
October 2017
Version 1.0

Candidate's paper Shopping

Length of assessment: 1 hour

Candidate's name:

City & Guilds enrolment number:

Date of registration:

Date assessment started:

Date assessment completed:

Candidate's declaration:

I confirm that this assessment is my own work.

Candidate's signature _____ Date _____

Candidate instructions

You have **1 hour** to complete this assessment.

- Read the paper carefully.
- There are **two** tasks.
- Answer **all** the questions.
- The maximum marks for each question are shown.
- You may use a dictionary.
- You may use a calculator.

You need:

- pens and pencils
- a ruler.

This page is intentionally blank

Task 1

You want to buy **two** presents.
You choose from this sale leaflet.

DVDs

Books

CDs

- 1a. Choose **two** different presents
Tick the presents you chose.

1 mark

1b. Which shelf or shelves are the presents you chose on? **2 marks**

.....
.....

1c. What is the **total** cost of the presents you chose?

Show your working.

4 marks

.....

You have this money.



2a. How much money do you have altogether?
Put units on your answer.

3 marks

.....

2b. Compare the money you have with the total cost of your presents.

1 mark

Do you have enough money to pay for the presents?
Give a reason.

.....

Task 1 total marks: 11

Task 2

You need to go to the bank to get some more money.
You check the opening times on your phone.



1. What time does the bank **close** today?

1 mark

.....

You go to the shoe shop to change some shoes that are too small.
The shoes are **size 6**.

You need **one size bigger**.

2. What size shoes do you need?

1 mark

.....

You want a large dog bowl and some dog food.

The pet shop has these dog bowls.

A

B

C

D



3a. Which dog bowl is the **largest**?

1 mark

.....

The dog bowl costs £3.

You buy this dog food too.



3b. What is the **total** cost for the dog bowl and the dog food?

Show your working.

Put units on your answer.

4 marks

.....

There is charity box at the till.



You have these coins.




You want to put all your 1p **and** 2p coins in the charity box.

4. Circle all the coins you will put in the charity box.

3 marks

You want to get the bus home.

This is the bus timetable

	Number 5 bus times
	Bus station 2 o'clock
	Bus station 4 o'clock
	Bus station 6 o'clock
	Bus station 8 o'clock

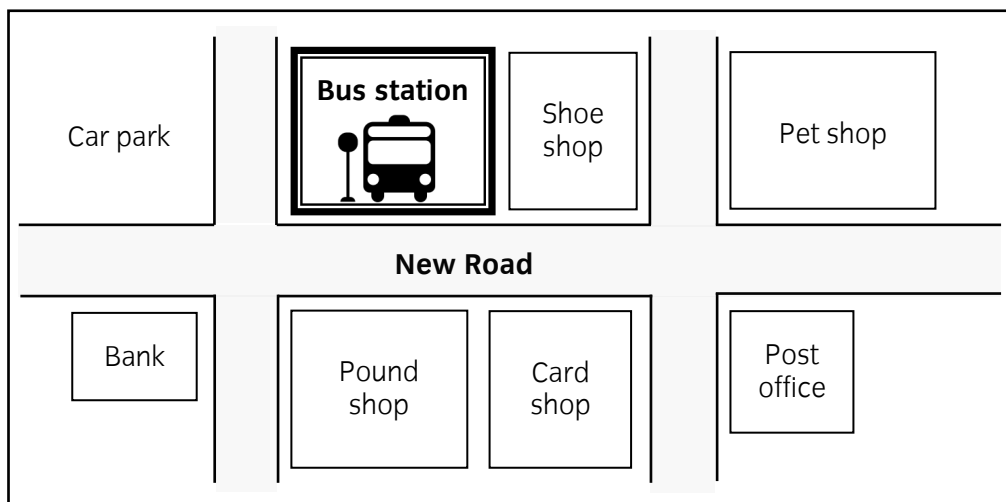
It is 3 o'clock.

5a. What time is the **next** bus from the bus station?

2 marks

.....

This map shows the bus station.

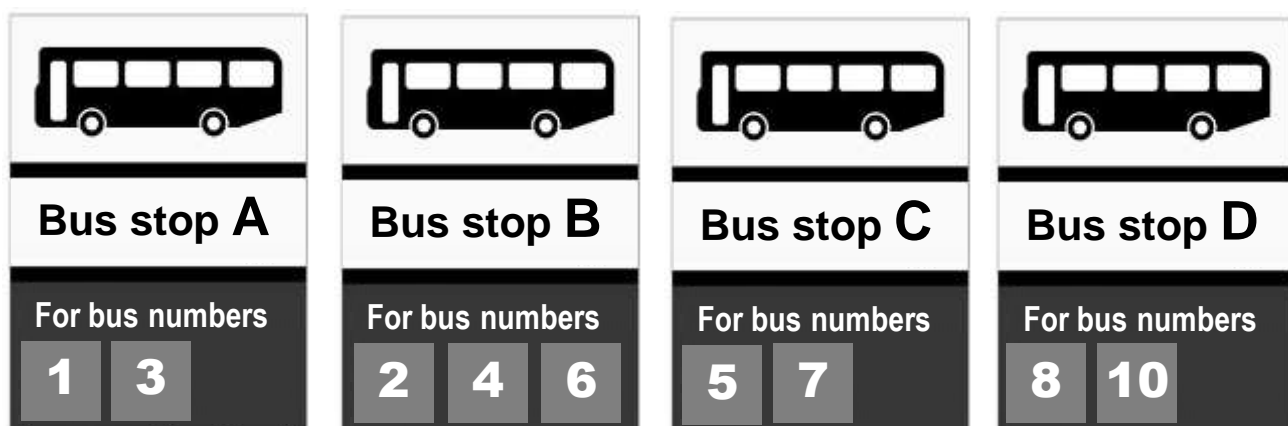


5b. Describe where the bus station is.

1 mark

.....

The bus stops show which buses go from there.



5c. Which bus stop does bus number **five** go from?

1 mark

.....

Your bus fare is £3.

You have these coins.



5d. Tick coins that make up the correct money for your bus fare.

1 mark

Task 2 total marks: 15
Total marks: 26

End of assessment

This page is intentionally blank

**Published by City & Guilds
1 Giltspur Street
London
EC1A 9DD**

www.cityandguilds.com

**City & Guilds is a registered charity
established to promote education
and training**