

# Functional Skills Mathematics Entry 1 Sample assessment



[www.cityandguilds.com](http://www.cityandguilds.com)  
October 2017  
Version 1.0

## Candidate's paper Takeaway meal

Length of assessment: 1 hour

Candidate's name: \_\_\_\_\_

City & Guilds enrolment number: \_\_\_\_\_

Date of registration: \_\_\_\_\_

Date assessment started: \_\_\_\_\_

Date assessment completed: \_\_\_\_\_

### Candidate's declaration:

I confirm that this assessment is my own work

Candidate's signature \_\_\_\_\_ Date \_\_\_\_\_

## Candidate instructions

You have **1 hour** to complete this assessment.

- Read the paper carefully.
- There are **two** tasks.
- Answer **all** the questions.
- The maximum marks for each question are shown.
- You may use a dictionary.
- You may use a calculator.

### You need:

- pens and pencils
- a ruler.

**This page is intentionally blank**

## Task 1

You and your friend Anna decide to have a takeaway meal.

This is the price list.

Order number	Main meal	Cost
1	Fish and chips	£4
2	Chicken salad	£4
3	Veggie burger	£2
4	Curry and rice	£3
	Dessert	Cost
5	Apple pie	£2
6	Brownie	£3
7	Ice cream	£1

Anna wants fish and chips and a brownie.

1. How much will her takeaway meal cost?

Show your working.

**4 marks**

.....

Choose a **different** main meal and dessert for yourself.

- 2a. Which main meal did you choose?

.....

How much does it cost?

**1 mark**

.....

2b. Which dessert did you choose?

.....

How much does it cost?

1 mark

.....

2c. What is the **total cost** for your main meal and your dessert?

Show your working.  
Put units on your answer.

3 marks

.....

You have this money.



3a. Tick the money you will use to pay for **your** main meal and your dessert.

1 mark

3b. How much money will you have left?

Show your working.  
Put units on your answer.

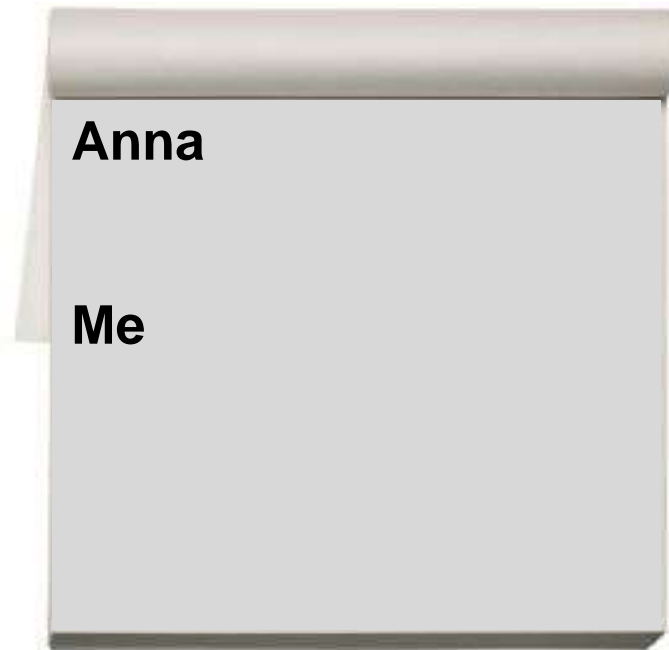
3 marks

.....

You order the meals.

4. Make a note of the order numbers on this note pad.

**2 marks**

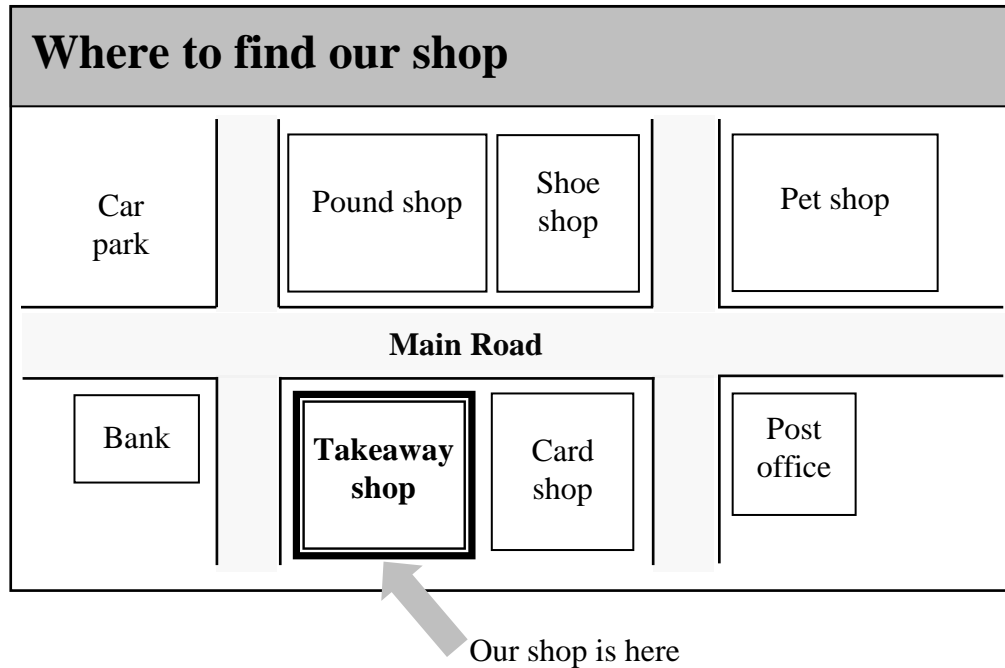


**Task 1 total marks: 15**

## Task 2

Anna will collect the takeaway meal.

This map is on the takeaway shop website.




1. Describe where the Takeaway shop is.

1 mark

.....

You cook some garlic bread ready for when the food arrives.

You need to set the oven to number **five**.



2. Circle where you will turn the dial to.

1 mark

You want to get the plates and glasses ready.

You have these plates.



You and Anna need one plate **each** for your main meals **and** one plate **each** for your desserts.

You will use **large round** plates for your main meals.

**3a.** Tick the plates for you and Anna.

**2 marks**

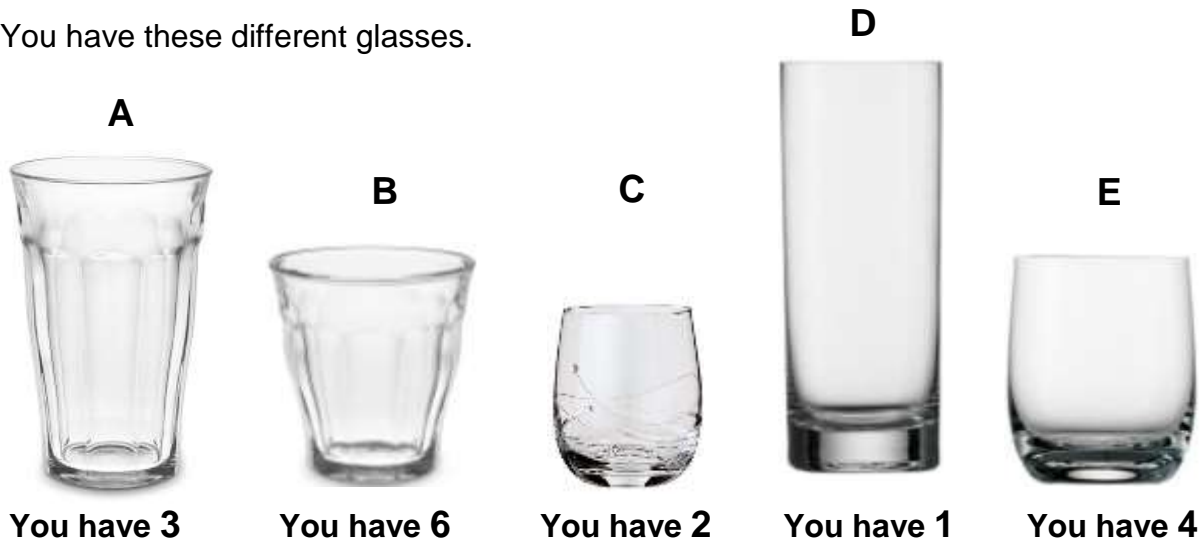
You will use **small square** plates for your desserts.

**3b.** Put crosses on the plates for you and Anna.

**2 marks**



You have these different glasses.



4a. Which glass is the **tallest**?

1 mark

.....

4b. Which glass is the **smallest**?

1 mark

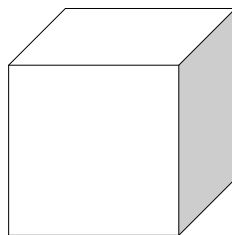
.....

4c. Which glass do you have the **most** of?

1 mark

.....

The fish and chips comes in this box.



5. What is the name of this shape?

2 marks

.....

**Task 2 total marks: 11**  
**Total marks: 26**

**End of assessment**

---

**Published by City & Guilds**  
**1 Giltspur Street**  
**London**  
**EC1A 9DD**  
**[www.cityandguilds.com](http://www.cityandguilds.com)**

**City & Guilds is a registered charity**  
**established to promote education and**  
**training**