

Functional Skills Mathematics (4748) Entry 1 Sample Assessment



www.cityandguilds.com
April 2023
Version 1.0

Candidate's paper - Non-calculator

Saving and Budgeting

Time allowed – 25 minutes

Marks: 8

Name: _____

City & Guilds Enrolment Number: _____

Date of registration: _____


Date of assessment: _____

You will need

- a pen with black or blue ink
- a pencil
- a rubber
- a ruler.

You may use a dictionary.

You must **not** use a calculator.



Instructions

- Read each question carefully.
- Answer **all** the questions.

Candidate's declaration:

I confirm that this assessment is my own work.


Candidate's signature _____

Date _____

Non-calculator paper

There are **8** marks available.

You must **not** use a calculator.



Q1

Work out $6 + 9 =$

.....

1 mark

Q2

What time does the clock show?




.....

1 mark

Q3

What is the name of this shape?



.....

1 mark

Q4

Building X

Building Y



Building X is Building Y

Choose the correct words to finish the sentence.
Tick one.

- A the same height as
- B taller than
- C shorter than
- D narrower than

1 mark

Q5

How many months are there in one year?

.....months

1 mark

Q6 A man saved these notes.
He pays £5 for a phone case.



How much money will he have left?

£.....

1 mark

Q7 A woman tips these coins out of her savings jar.
She wants to put all the 5p coins in a charity box.



Tick all the coins she will put in the charity box.

1 mark

Q8 A man saves £15

He spends £7 on a cinema ticket.

This is how he works out how much change he will get.

$$\mathbf{£15 - £7 = £8}$$

Show how the man can check his answer.

Show your check here.

1 mark

Total marks: 8

End of non-calculator paper

This page is intentionally blank

**Published by City & Guilds
5-6 Giltspur Street
London
EC1A 9DE
www.cityandguilds.com**

**City & Guilds is a registered charity
established to promote education and
training**

Functional Skills Mathematics (4748) Entry 1 Sample Assessment

Candidate's paper - Calculator allowed

Saving and Budgeting

Time allowed – 65 minutes

Marks: 24

Name: _____


City & Guilds Enrolment Number: _____

Date of registration: _____

Date of assessment: _____

You will need

- a calculator
- a pen with black or blue ink
- a pencil
- a rubber
- a ruler.



Instructions

- Read each question carefully.
- Answer **all** the questions.

Candidate's declaration:

I confirm that this assessment is my own work.

Candidate's signature _____

Date _____

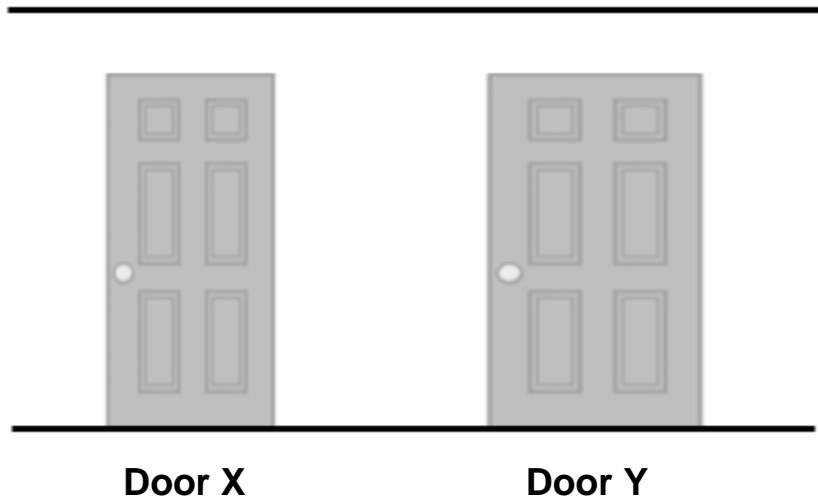
Calculator paper

There are **24** marks available.

You may use a calculator.



Q1



Door X is Door Y.


Choose the correct words to finish the sentence.
Tick one.

- A wider than
- B taller than
- C narrower than
- D shorter than

1 mark

Q2

What is the name of this shape?



.....

1 mark

Q3

Subtract 3 from 17

.....

1 mark

Q4 A woman saved this amount of money.

She wants to buy a packet of sweets that cost 16p.



a

Does she have enough money?

Give a reason your answer. Use numbers to help you.

Show your working

Yes/No

Reason

.....
.....

2 marks

Another woman wants to buy some things for her new home.
She has this amount of money








b How much money has she got?

.....

1 mark

She makes a list of some things she would like to buy.

Cushion		£5
Doormat		£15
Vase		£7
Photo frame		£9
Candle		£12

c Tick one thing on her list she can buy.

1 mark

Q5 A man saved these coins each week.
He wants to take them to the Post Office to put in his savings account.



a How much will he take to the Post Office?

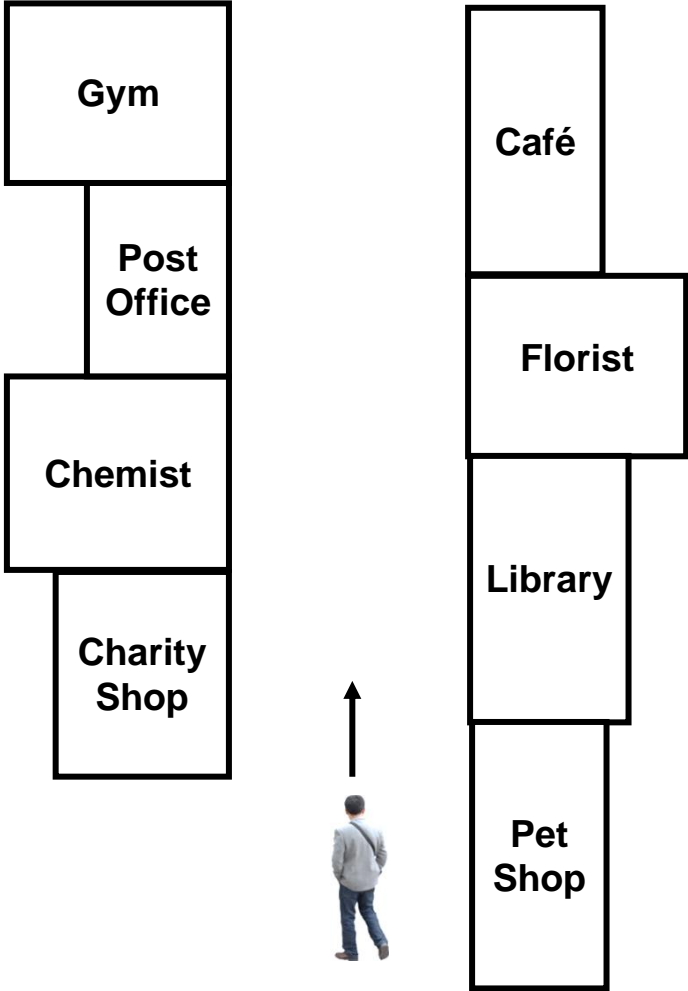
Space for working.

£

2 marks

The man wants to know on what side of the road the Post Office is. He asks a friend.

The friend looks at this map.




b

What does his friend tell him?
Use the map to help you finish the sentence.

The Post Office is on the..... side of the road.

1 mark

The Post Office opens at 10 o'clock.
The man checks the time on his phone.



c

Is the Post Office open now?
How do you know?

Yes/No.....

I know because

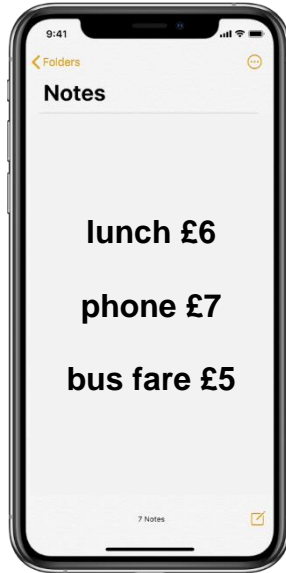
.....

.....

2 marks

Q6 A woman is paid £20 each day.
She has to use some of this money to pay for her lunch, her phone and her bus fare.

She keeps a note of how much she needs to pay each day.



a How much money does she need to pay each day?

Show your working.

£.....

2 marks

b Complete the boxes to show how much money she will have left.

$$\square - \square = \square$$

2 marks

Q7 A man saves £1 coins each month.
At the end of each month he counts the coins. he saved.

These are the coins he saved in Month 4.

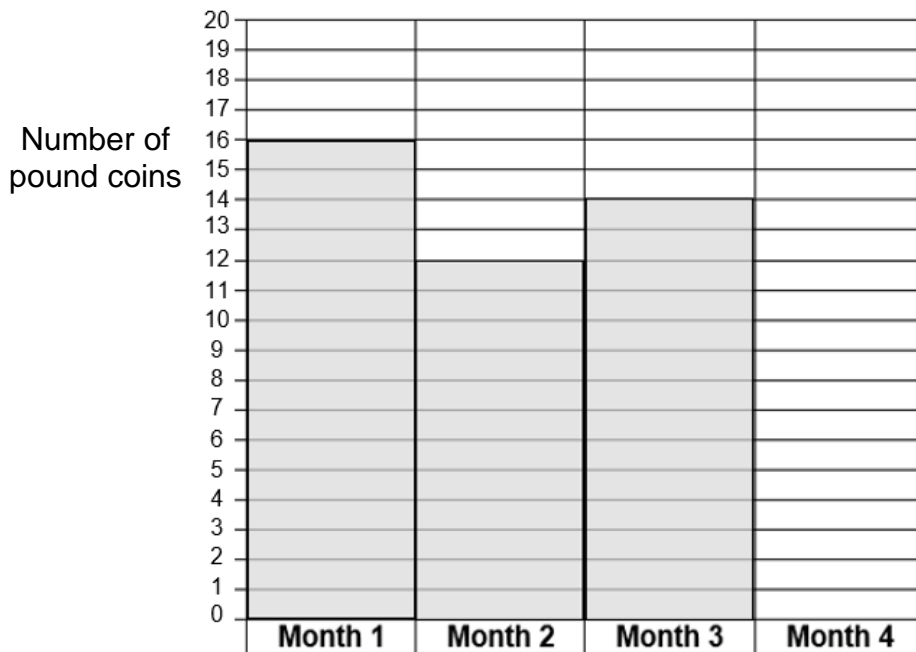


a How many pound coins did he save in Month 4?

..... pound coins

1 mark

He starts to draw a chart to show the number of coins he saves each month.



b Draw the bar for Month 4.

1 mark

Q8 A woman saves money to pay for her lunch for **each day next week**.

a How many days is this?

.....days

1 mark

She arranges to meet a friend for lunch at 1 o'clock.

b Which of these clocks shows the time she will meet her friend?
Tick one.



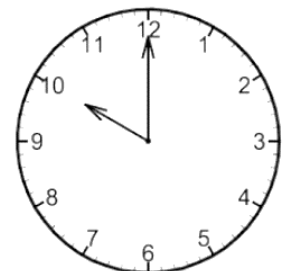
A



B



C



D

1 mark

She has this note to pay for her lunch.



She wants to buy a sandwich, a cake and a **large** bottle of water.
She chooses from the menu.

Menu

Sandwiches

- Cheese £3
- Chicken £5
- Tuna £4

Cakes

- Lemon £2
- Banana £3
- Chocolate £4

Drinks



water
£3



water
£2



tea
£2



cola
£1

The waiter asks the woman what she would like to order.

c What does the woman tell the waiter?

I would like a
.....
.....
.....

4 marks

Total marks: 24

End of calculator paper

This page is intentionally blank

**Published by City & Guilds
5-6 Giltspur Street
London
EC1A 9DE
www.cityandguilds.com**

**City & Guilds is a registered charity
established to promote education and
training**