

# Functional Skills Mathematics Entry 1 sample assessment



www.cityandguilds.com  
September 2017  
Version 1.0

## Candidate's paper Simply Snack

Length of assessment: 1 hour

Candidate's name:

---

City & Guilds enrolment number:

---

Date of registration:

---

Date assessment started:

---

Date assessment completed:

---

### Candidate's declaration:

I confirm that this assessment is my own work

Candidate's signature \_\_\_\_\_ Date \_\_\_\_\_

## Candidate instructions

You have **1 hour** to complete this assessment.

- Read the paper carefully
- There are **two** tasks
- Answer **all** the questions
- The maximum marks for each question are shown
- You may use a dictionary
- You may use a calculator.

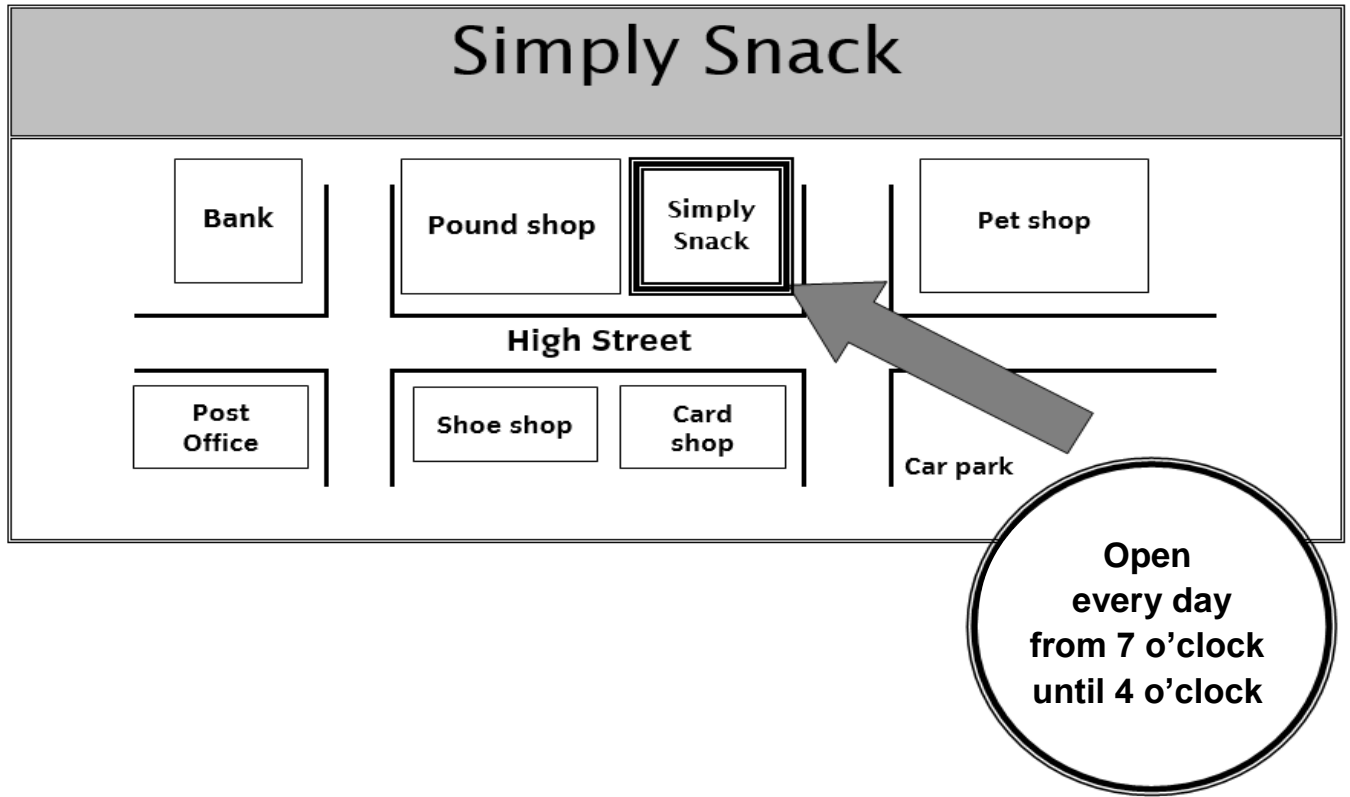
### You need:

- pens and pencils
- a ruler.

# Task 1

You work in a coffee shop called Simply Snack.

This is a leaflet that Simply Snack gives out.



1. Explain where Simply Snack is.

1 mark

.....  
.....

On **Wednesday** a friend tells you she wants to go to the coffee shop the next day.

2a. What day is the day after Wednesday?

1 mark

.....

She wants to go in the **afternoon**.

2b. Look at the leaflet and then tell your friend a good time to go.

1 mark

.....

This is the menu at the coffee shop.

	<b>panini</b>	<b>£2</b>
	<b>jacket potato</b>	<b>£2</b>
	<b>toastie</b>	<b>£2</b>
	<b>hot drink</b>	<b>£1</b>
	<b>chocolate cake</b>	<b>£1</b>

A customer orders a panini and a hot drink.

**3a.** What is the total cost for the panini and hot drink?

Show your working.  
Put units on your answer.

**4 marks**

.....

The customer gives you this amount of money.



**3b.** Is this enough to pay for the panini and hot drink?


Give a reason for your answer.

**2 marks**

.....

You need to put the panini on the grill.


You have to set this timer for **two** minutes.



4. Tick where you will turn the arrow on the timer to.

**1 mark**

You have these paper bags in the coffee shop.



Choose a bag to put the panini in. **Tick the bag you chose.**

**5a.** What is the shape of the bag you chose?

**1 mark**

.....

**5b.** Why did you choose that bag?

**1 mark**

.....

**Task 1 total marks: 12**

## Task 2

A customer arrives with a friend. They find an empty table to sit at.

They sit at **table number five**.

**1a.** Write down the table number and how many people are at the table.

<b>Table number</b> .....
<b>Number of customers</b> .....

**2 marks**

The customer orders a jacket potato and his friend orders chocolate cake.

A jacket potato costs £2 and chocolate cake costs £1.

**2a.** What is the **total** cost for the jacket potato and chocolate cake?

Show your working.

**2 marks**

.....

The customer gives you this amount of money to pay for the jacket potato and chocolate cake.



**2b.** How much change does the customer need?

Show your working.

**3 marks**

.....

You have 4 different plates.



Choose one of these plates to put the chocolate cake on.  
**Tick the plate you chose.**



3. Describe the **size** and the **shape** of the plate you chose.

**2 marks**


.....

.....



The manager asks you put some **square** plates in the dishwasher.

You have plates these shapes



4a. Which plate is a square? **Tick your answer.**

**1 mark**

You have these clean large glasses and small glasses.



4b. How many **small** glasses are there?

**2 marks**

.....

There are 10 tables inside the coffee shop.

Two of the tables are empty. Customers are eating at all the other tables.

**5.** How many tables have customers?

Show your working.

**2 marks**

.....

**Task 2 total marks: 14**

**Total marks: 26**

**End of assessment**

**This page is intentionally blank**

---

**Published by City & Guilds  
1 Giltspur Street  
London  
EC1A 9DD**

**[www.cityandguilds.com](http://www.cityandguilds.com)**

**City & Guilds is a registered charity  
established to promote education  
and training**